

विषय -हिन्दी

पठन

राज के पास किट्टी नाम की एक पालतू बिल्ली है। वह सफेद और भूरे रंग की है। राज को अपने घर के पिछवाड़े में किट्टी के साथ खेलना पसंद है, वे दोनों साथ में तित्तलियों का पीछा करते हैं, और घास में लौटते हैं। राज अपनी बिल्ली से बहुत प्यार करता है।

निम्नलिखित प्रश्नों के उत्तर दीजिए।

1. किट्टी किसकी बिल्ली है ?

- a) करन b) सिमरन c) राज d) संजय

उत्तर - (c) राज

2. किट्टी किस रंग की बिल्ली है ?

- a) काली b) सफेद व भूरी c) सफेद व काली d) भूरी व काली

उत्तर - (b) सफेद व भूरी

लेखन

3. सुनीता की माँ ने बाज़ार से क्या मँगवाया था।

- a) चीनी b) गुड़ c) दूध d) सब्ज़ी

उत्तर - (a) चीनी

4. सुलेमान की मदद किसने की ?

- a) गिद्ध ने b) कबूतर c) हुदहुद ने d) बुलबुल ने

उत्तर - (a) गिद्ध ने

व्याकरण

5. खुशी का कौन सा विलोम शब्द नहीं है बताइए?

- a) परेशान b) प्रसन्न c) हँसना d) मुस्कुराना

उत्तर - (a) परेशान

6. नया शब्द बनाइये ? अर्थ +शास्त्र

- a) अर्थशास्त्र b) अर्था शास्त्र c) अरथ शास्त्र d) अर्थ शस्त्र

उत्तर - (a) अर्थशास्त्र

7. रात का कौन सा पर्यायवाची शब्द नहीं है बताइए ?

- a) रजनी b) रात्रि c) अंधेरा d) निशा उत्तर **-(c) अंधेरा**

वर्तनी

8. सही शब्द का चयन करिए ?

a) नाशता b) नासता c) नाशता d) नाषता

उत्तर - (c) नाशता

9. इन अक्षरों को सही क्रम में रखने पर कौन सा शब्द बनेगा ? नी सु ता

a) नीसुता b) सुनीता c) तसुनी d) सुतानी

उत्तर - (b) सुनीता

10. सही अक्षर भरकर सार्थक शब्द बनाइये ? सु __मा__

a) ले, ना b) लो, न c) लौ, नी d) ले, न

उत्तर - (d) ले, न

MATHS

Q1. How many grams are there in 1kg?

a) 10 g b) 100 g c) 1000 g d) 10000 g

Answer- c) 1000 g

Feedback:- There are 1000g in 1kg.

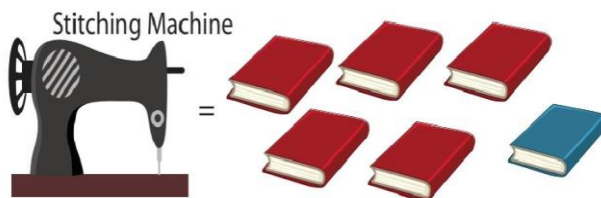
Q2. To calculate boundary of any shape/figure, what will you do?

a) Add all the sides
b) Subtract all the sides
c) Multiply all the sides
d) Divide all the sides

Answer- a) Add all the sides

Feedback:- To find the perimeter, we add together the lengths of all the sides.

Q3. If one blue book weighs 300 g and red book weighs 700 g, then what will be the weight of the following thing ?

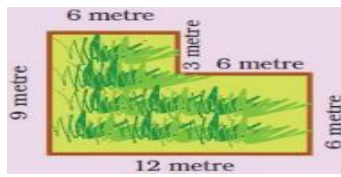


a) 1kg 800g b) 2kg 100g c) 3kg 300g d) 3kg 800g

Answer- d) 3kg 800g

Feedback:- Weight of stitching machine = $(1 \times 300g) + (5 \times 700g) = 300g + 3500g = 3800g$
 $3800g = (3 \times 1000)kg + 800g = 3kg 800g$

Q4. Find the length of the boundary of given picture:-



- a) 24 m b) 39 m c) 42 m d) 36 m

Answer- c) 42m

Feedback:- Length of the boundary = 6 m + 3 m + 6 m + 6 m + 12 m + 9 m = 42 m

Q5. Tick the most suitable weight for the following :-



- a) 3 kg b) 30 kg c) 300 kg d) 300g

Answer- b) 30 kg

Feedback:- At the age of 10 years the weight of a boy is approximately 30kg.

Q6. What will be the length of the boundary of a square whose each side is 8 cm?

- a) 16 cm b) 24 cm c) 32 cm d) 36 cm

Answer- c) 32 cm

Feedback:- A square has 4 equal sides. So the length of boundary will be $4 \times 8 = 32\text{cm}$.

Q7. Ryan is shifting to his new home. His father booked a van which loaded the following things in the van, whose weights are as follows:

Items loaded	Weight of each item
Bed	15 kg
Fan	6 kg
Sacks of grains	60 kg
Sofa	9 kg
Table	4 kg
Cooler	7 kg
Refrigerator	14 kg

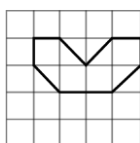
Find the total weight of all the items: _____

- a) 105 kg b) 139 kg c) 92 kg d) 115 kg

Answer- d) 115 kg

Feedback:- Total weight= 15 kg + 6 kg + 60 kg + 9 kg+ 4 kg+ 7 kg+ 14 kg= 115 kg

Q8. Find the number of squares in the given figure:.



- a) 4 b) 6 c) 8 d) 10

Answer- b) 6

Feedback- The figure contains 4 fully filled squares and 4 half-filled squares. Therefore, the number of squares in this figure will be $4 \times 1 + 4 \times 1/2 = 4 + 2 = 6$

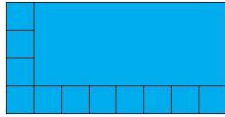
Q9. A bag of flour weighs 3 kg. If a chef needs 15 kg of flour, how many bags of flour should he buy?

- a) 2 b) 3 c) 4 d) 5

Answer- d) 5

Feedback:- Number of flour bags = $15/3 = 5$ bags

Q10. How many squares of one centimetre can fill this blue rectangle?



- a) 24 b) 32 c) 40 d) 16

Answer- b) 32

Feedback:- There are 4 rows and 1 row is having 8 squares. Total squares = $4 \times 8 = 32$. So we can say 32 small squares can fill this blue rectangle.

EVS

1. The money used in Abu Dhabi was different and was called :

- a) Dollar b) Dirham c) Rupee d) Paisa

Ans: b) Dirham

2. The is the most common fruit in Abu Dhabi.

- a) Mango b) Coconut c) Banana d) Date

Ans: d) Date

3. Choose the correct value of the currency note:

- a) 2 b) 2000 c) 20 d) 200

Ans: d) 200

4. The capital city of United Arab Emirates (UAE) is called

- a) Dubai b) Abu Dabhi c) Delhi d) Riyadh

Ans: b) Abu-Dabhi

5. Marietta's family is quarrelling over- just like they do every day!

- a) Food b) Picnic c) watching TV d) Ice-cream

Ans: c) watching TV

6) Who is hurrying home from her friend's house?

- a) Pratibha b) Sanjay c) Sandeep d) Marietta

Ans: Pratibha

7) The weather in Abu Dhabi and its neighbour countries are very hot, people wear loose clothes and keep themselves fully covered.

- a) Silk b) Woollen c) Cotton d) Denim

Ans: c) Cotton

8. Mukhtapur village is in the Pochampalli town (mandal) of which state ?

- a) Madhya Pradesh b) Telangana c) Tamil Nadu d) Kerala

Ans: Telangana

9. Most of the families in Pochampalli town are

- a) Doctors b) Engineers c) Weavers d) Gardeners

Ans: c) Weavers

10. The woman in the below picture is wearing famous.....saree.

- a) Chanderi b) Pochampalli c) Banarasi d) Kalamkari

Ans: b) Pochampalli

XXXXXXXXXXXXXXXXXXXXXXX